



# 2ND GRADE IS LUCKY TO HAVE YOU!

Thank you, future 2nd grader!  
for your hard work over the  
summer. Your special treat is  
10 Class Dojo points to start  
the year!

\_\_\_\_\_.

From,  
Your 2nd Grade Teacher!

## DIRECTIONS:

When you complete a page in the summer review pack, have an adult check your answers. Then color in the matching page number below. If you complete the summer review packet, return it to your 1<sup>st</sup> grade teacher at the beginning of the school year to show off your hard work!

10	20	30	40	50
9	19	29	39	49
8	18	28	38	48
7	17	27	37	47
6	16	26	36	46
5	15	25	35	45
4	14	24	34	44
3	13	23	33	43
2	12	22	32	42
1	11	21	31	41

# THE BEST THING ABOUT SUMMER IS...



The best thing about summer is \_\_\_\_\_

---

---

---

---

---

---

---

---

Draw a picture to match your writing.



## FAST MATH - SUBTRACTION

2  
MATH

Solve these SUBTRACTION problems as fast as you can.

$\begin{array}{r} 9 \\ -6 \\ \hline \end{array}$	$\begin{array}{r} 8 \\ -4 \\ \hline \end{array}$	$\begin{array}{r} 9 \\ -7 \\ \hline \end{array}$	$\begin{array}{r} 10 \\ -4 \\ \hline \end{array}$	$\begin{array}{r} 7 \\ -4 \\ \hline \end{array}$	$\begin{array}{r} 8 \\ -6 \\ \hline \end{array}$	$\begin{array}{r} 5 \\ -3 \\ \hline \end{array}$	$\begin{array}{r} 8 \\ -6 \\ \hline \end{array}$
--	--	--	---	--	--	--	--

$\begin{array}{r} 9 \\ -7 \\ \hline \end{array}$	$\begin{array}{r} 8 \\ -5 \\ \hline \end{array}$	$\begin{array}{r} 7 \\ -4 \\ \hline \end{array}$	$\begin{array}{r} 5 \\ -4 \\ \hline \end{array}$	$\begin{array}{r} 6 \\ -3 \\ \hline \end{array}$	$\begin{array}{r} 6 \\ -2 \\ \hline \end{array}$	$\begin{array}{r} 8 \\ -6 \\ \hline \end{array}$	$\begin{array}{r} 4 \\ -3 \\ \hline \end{array}$
--	--	--	--	--	--	--	--

$\begin{array}{r} 8 \\ -7 \\ \hline \end{array}$	$\begin{array}{r} 9 \\ -7 \\ \hline \end{array}$	$\begin{array}{r} 10 \\ -8 \\ \hline \end{array}$	$\begin{array}{r} 7 \\ -5 \\ \hline \end{array}$	$\begin{array}{r} 7 \\ -7 \\ \hline \end{array}$	$\begin{array}{r} 8 \\ -6 \\ \hline \end{array}$	$\begin{array}{r} 8 \\ -7 \\ \hline \end{array}$	$\begin{array}{r} 9 \\ -7 \\ \hline \end{array}$
--	--	---	--	--	--	--	--

$\begin{array}{r} 6 \\ -5 \\ \hline \end{array}$	$\begin{array}{r} 6 \\ -6 \\ \hline \end{array}$	$\begin{array}{r} 9 \\ -7 \\ \hline \end{array}$	$\begin{array}{r} 6 \\ -2 \\ \hline \end{array}$	$\begin{array}{r} 9 \\ -1 \\ \hline \end{array}$	$\begin{array}{r} 7 \\ -6 \\ \hline \end{array}$	$\begin{array}{r} 5 \\ -3 \\ \hline \end{array}$	$\begin{array}{r} 7 \\ -2 \\ \hline \end{array}$
--	--	--	--	--	--	--	--

$\begin{array}{r} 8 \\ -1 \\ \hline \end{array}$	$\begin{array}{r} 9 \\ -7 \\ \hline \end{array}$	$\begin{array}{r} 6 \\ -4 \\ \hline \end{array}$	$\begin{array}{r} 9 \\ -8 \\ \hline \end{array}$	$\begin{array}{r} 10 \\ -9 \\ \hline \end{array}$	$\begin{array}{r} 8 \\ -7 \\ \hline \end{array}$	$\begin{array}{r} 6 \\ -3 \\ \hline \end{array}$	$\begin{array}{r} 5 \\ -3 \\ \hline \end{array}$
--	--	--	--	---	--	--	--



## CONTEXT CLUES

3  
READING

The following stories have make-believe words. Use the clues in the sentence to figure out the meaning of the make-believe word.

Last summer I went to the beach with my grandma. She loves to look for sнарples hidden in the sand. Her favorite kind of sнарples are the ones that have no broken pieces. The coolest sнарples I found still had a small crab living inside. I left that sнарple on the beach instead of putting it in my collection.

What do you think sнарples are?

What words help you figure out the meaning of the word sнарples?

It was the hottest day of the summer so Lucy and Susie decided to sell some refreshing blarling on the street outside their house. Susie picked fresh fruit from a tree in her yard and Lucy was in charge of getting ice from her house. The blarling was a little sour, so they had to add some sugar.

What do you think blarling is?

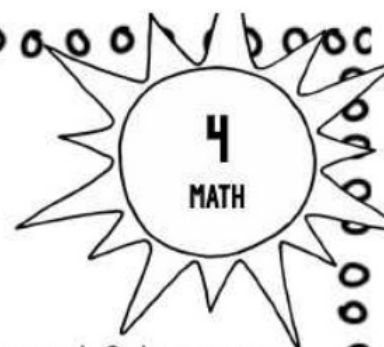
What words help you figure out the meaning of the word blarling?

"Don't forget to put some clinket on before you go outside" said Claudio's mother. Claudio did not like to wear clinket because the lotion sometimes gets in his eyes and stings. But, clinket is important so that you do not get a sunburn so he rubs it all over his skin. Claudio had a painful sunburn last summer so now he has learned his lesson and wears clinket whenever he is playing in the sun.

What do you think clinket are?

What words help you figure out the meaning of the word clinket?

## PROBLEM SOLVING



Lucy put 6 towers on the sandcastle. Molly put 9 towers on the sandcastle. How many more towers did Molly put than Lucy?

Number Sentence	Answer

Clara has 19 water balloons. She gives 7 away to her friends. How many does she have left?

Number Sentence	Answer

Billy picked 17 strawberries. He ate 9 of the strawberries and gave the rest to his brother. How many did he give to his brother?

Number Sentence	Answer

## SENTENCE OR FRAGMENT?

5

GRAMMAR

Circle the COMPLETE sentences.


Cross out the incomplete sentence FRAGMENTS.

HINT: There are FIVE complete sentences and SEVEN fragments.

The kitten is playing.	At the swimming pool.	On the white porch.
Kyle turned off the TV.	Do you like waterslides?	Drippy ice cream.
Fran's favorite shoes.	Fran's shoes are on the porch.	The huge red beach ball.
Do you have shorts?	Outside by the big barn.	Laughing and playing at the beach.



# PLACE VALUE



**DRAW BASE TEN BLOCKS TO  
SHOW**

**18**

**DRAW BASE TEN BLOCKS TO  
SHOW**

**40**

# NOUN SEARCH!

Choose a book and find 14 different nouns (person, place, thing, or animal). Write the nouns in the space below.

7  
GRAMMAR

Book Title:

---


---

---

Author:

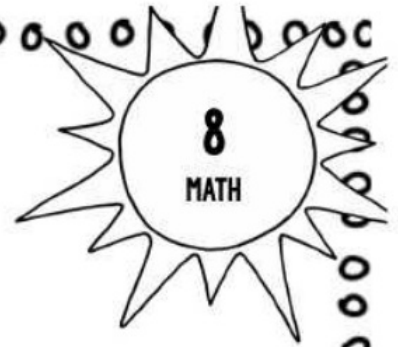
---

---



1. \_\_\_\_\_
2. \_\_\_\_\_
3. \_\_\_\_\_
4. \_\_\_\_\_
5. \_\_\_\_\_
6. \_\_\_\_\_
7. \_\_\_\_\_
8. \_\_\_\_\_
9. \_\_\_\_\_
10. \_\_\_\_\_
11. \_\_\_\_\_
12. \_\_\_\_\_
13. \_\_\_\_\_
14. \_\_\_\_\_

# PLACE VALUE REVIEW



WHAT IS THE MYSTERY NUMBER?

**52   25   15   35**

The number is greater than 20.

It is less than 40.

There is a 2 in the tens place.

The mystery number is: \_\_\_\_\_

WHAT IS THE MYSTERY NUMBER?

**48   52   67   54**

The number is less than 60

The number is greater than 50

The number has a 4 in the ones place

The mystery number is: \_\_\_\_\_



# PROPER NOUNS

9

GRAMMAR

Read the words in each box.

Circle the word or phrase in each box that is a proper noun and needs a capital letter.

Hint: Names of people, months, and days of the week are all proper nouns

sam doll car	map monday marbles	beach august sand
susie surfboard saltwater	june waterpark slide	lemonade driving friday
chipmunk simon singing	sunday water ice cube	miss swanson teacher vacation

Write a sentence that includes two proper nouns:

---

---

---

## PARTITIONING SHAPES

10

MATH

Adam and Lisa each made a sandwich. They both cut their sandwich in a different way from each other. Both sandwiches were cut into four equal shares. How could they have cut them?

Adam

If he eats one quarter of this sandwich, how much will he have left?

\_\_\_\_\_

Lisa

If she ate four shares of this sandwich, how much will she have left?

\_\_\_\_\_

Draw lines to cut the pizza into four equal shares.

Color in one-fourth of the pizza.

\_\_\_\_\_



# BOOK RESPONSE: Ask Questions



Read a fiction book at your reading level. As you read,  
write down the questions you notice yourself asking.

Book Title: \_\_\_\_\_

**WHO?**

**WHAT?**

**WHY?**

**HOW?**

**WHERE?**



## FAST MATH - ADDITION

12  
MATH

Solve these ADDITION problems as fast as you can.

$\begin{array}{r} 2 \\ + 6 \\ \hline \end{array}$	$\begin{array}{r} 5 \\ + 3 \\ \hline \end{array}$	$\begin{array}{r} 2 \\ + 12 \\ \hline \end{array}$	$\begin{array}{r} 3 \\ + 7 \\ \hline \end{array}$	$\begin{array}{r} 2 \\ + 7 \\ \hline \end{array}$	$\begin{array}{r} 13 \\ + 2 \\ \hline \end{array}$	$\begin{array}{r} 4 \\ + 8 \\ \hline \end{array}$	$\begin{array}{r} 2 \\ + 16 \\ \hline \end{array}$
---	---	--	---	---	--	---	--

$\begin{array}{r} 4 \\ + 9 \\ \hline \end{array}$	$\begin{array}{r} 8 \\ + 5 \\ \hline \end{array}$	$\begin{array}{r} 5 \\ + 5 \\ \hline \end{array}$	$\begin{array}{r} 12 \\ + 4 \\ \hline \end{array}$	$\begin{array}{r} 15 \\ + 2 \\ \hline \end{array}$	$\begin{array}{r} 4 \\ + 8 \\ \hline \end{array}$	$\begin{array}{r} 13 \\ + 4 \\ \hline \end{array}$	$\begin{array}{r} 16 \\ + 3 \\ \hline \end{array}$
---	---	---	--	--	---	--	--

$\begin{array}{r} 5 \\ + 9 \\ \hline \end{array}$	$\begin{array}{r} 13 \\ + 6 \\ \hline \end{array}$	$\begin{array}{r} 7 \\ + 5 \\ \hline \end{array}$	$\begin{array}{r} 13 \\ + 6 \\ \hline \end{array}$	$\begin{array}{r} 12 \\ + 7 \\ \hline \end{array}$	$\begin{array}{r} 6 \\ + 4 \\ \hline \end{array}$	$\begin{array}{r} 9 \\ + 7 \\ \hline \end{array}$	$\begin{array}{r} 6 \\ + 6 \\ \hline \end{array}$
---	--	---	--	--	---	---	---

$\begin{array}{r} 8 \\ + 5 \\ \hline \end{array}$	$\begin{array}{r} 12 \\ + 8 \\ \hline \end{array}$	$\begin{array}{r} 7 \\ + 8 \\ \hline \end{array}$	$\begin{array}{r} 9 \\ + 10 \\ \hline \end{array}$	$\begin{array}{r} 9 \\ + 7 \\ \hline \end{array}$	$\begin{array}{r} 9 \\ + 8 \\ \hline \end{array}$	$\begin{array}{r} 9 \\ + 6 \\ \hline \end{array}$	$\begin{array}{r} 8 \\ + 8 \\ \hline \end{array}$
---	--	---	--	---	---	---	---

$\begin{array}{r} 7 \\ + 9 \\ \hline \end{array}$	$\begin{array}{r} 6 \\ + 12 \\ \hline \end{array}$	$\begin{array}{r} 10 \\ + 6 \\ \hline \end{array}$	$\begin{array}{r} 7 \\ + 9 \\ \hline \end{array}$	$\begin{array}{r} 10 \\ + 6 \\ \hline \end{array}$	$\begin{array}{r} 11 \\ + 4 \\ \hline \end{array}$	$\begin{array}{r} 12 \\ + 5 \\ \hline \end{array}$	$\begin{array}{r} 7 \\ + 9 \\ \hline \end{array}$
---	--	--	---	--	--	--	---

## PERFECT SUMMER DAY...

Write about the perfect summer day from morning until night.  
Include at least four sentences.

13

WRITING

---

---

---

---

---

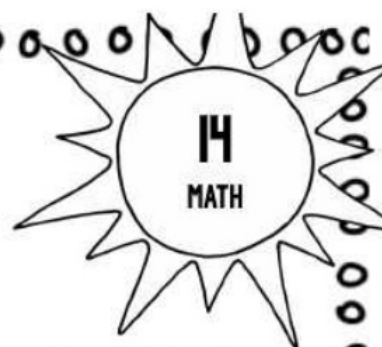
---

---

---

Draw a picture to match your writing.

## PROBLEM SOLVING



Luke threw 14 water balloons at his older brother. 7 of his water balloons missed his brother. The rest hit him. How many water balloons hit his brother?

Number Sentence	Answer

Ten kids can be in the swimming class at one time. 13 kids want to be in the swimming class. How many kids will not be able to join the swimming class?

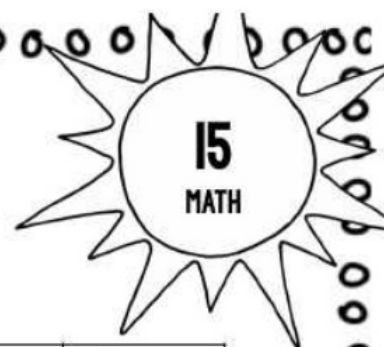
Number Sentence	Answer

The ice cube tray holds 18 ice cubes. Melissa used 9 ice cubes and left the rest in the ice cube tray. How many ice cubes did she leave in the tray?

Number Sentence	Answer



# ADDITION



<p>Add:</p> $\begin{array}{r} 34 \\ + 5 \\ \hline \end{array}$	<p>Show how to solve this using base ten block drawings:</p>	<p>Answer:</p>
---	--	----------------

<p>Add:</p> $\begin{array}{r} 22 \\ + 30 \\ \hline \end{array}$	<p>Show how to solve this using base ten block drawings:</p>	<p>Answer:</p>
--	--	----------------

Choose one of the problems above and write a subtraction sentence that matches:

\_\_\_\_\_ - \_\_\_\_\_ = \_\_\_\_\_

# PREFIXES AND SUFFIXES

**16**  
**GRAMMAR**

Compare the two words. How did the meaning of the word change when the prefix or suffix was added?

<b>agree</b>	<b>disagree</b>	How did adding "DIS" change the meaning of the word?
<b>build</b>	<b>rebuild</b>	How did adding "RE" change the meaning of the word?
<b>walk</b>	<b>walked</b>	How did adding "ED" change the meaning of the word?
<b>class</b>	<b>classes</b>	How did adding "ES" change the meaning of the word?

## FAST MATH - ADDITION

17  
MATH

Solve these ADDITION problems as fast as you can.

$\begin{array}{r} 4 \\ + 9 \\ \hline \end{array}$	$\begin{array}{r} 4 \\ + 8 \\ \hline \end{array}$	$\begin{array}{r} 5 \\ + 12 \\ \hline \end{array}$	$\begin{array}{r} 6 \\ + 7 \\ \hline \end{array}$	$\begin{array}{r} 7 \\ + 3 \\ \hline \end{array}$	$\begin{array}{r} 12 \\ + 4 \\ \hline \end{array}$	$\begin{array}{r} 2 \\ + 9 \\ \hline \end{array}$	$\begin{array}{r} 4 \\ + 14 \\ \hline \end{array}$
---	---	--	---	---	--	---	--

$\begin{array}{r} 2 \\ + 8 \\ \hline \end{array}$	$\begin{array}{r} 13 \\ + 4 \\ \hline \end{array}$	$\begin{array}{r} 9 \\ + 7 \\ \hline \end{array}$	$\begin{array}{r} 11 \\ + 5 \\ \hline \end{array}$	$\begin{array}{r} 14 \\ + 3 \\ \hline \end{array}$	$\begin{array}{r} 3 \\ + 9 \\ \hline \end{array}$	$\begin{array}{r} 13 \\ + 5 \\ \hline \end{array}$	$\begin{array}{r} 12 \\ + 6 \\ \hline \end{array}$
---	--	---	--	--	---	--	--

$\begin{array}{r} 5 \\ + 9 \\ \hline \end{array}$	$\begin{array}{r} 15 \\ + 3 \\ \hline \end{array}$	$\begin{array}{r} 11 \\ + 5 \\ \hline \end{array}$	$\begin{array}{r} 11 \\ + 4 \\ \hline \end{array}$	$\begin{array}{r} 13 \\ + 6 \\ \hline \end{array}$	$\begin{array}{r} 7 \\ + 4 \\ \hline \end{array}$	$\begin{array}{r} 12 \\ + 6 \\ \hline \end{array}$	$\begin{array}{r} 7 \\ + 8 \\ \hline \end{array}$
---	--	--	--	--	---	--	---

$\begin{array}{r} 12 \\ + 4 \\ \hline \end{array}$	$\begin{array}{r} 13 \\ + 4 \\ \hline \end{array}$	$\begin{array}{r} 7 \\ + 9 \\ \hline \end{array}$	$\begin{array}{r} 8 \\ + 9 \\ \hline \end{array}$	$\begin{array}{r} 11 \\ + 8 \\ \hline \end{array}$	$\begin{array}{r} 8 \\ + 8 \\ \hline \end{array}$	$\begin{array}{r} 9 \\ + 7 \\ \hline \end{array}$	$\begin{array}{r} 6 \\ + 8 \\ \hline \end{array}$
--	--	---	---	--	---	---	---

$\begin{array}{r} 7 \\ + 12 \\ \hline \end{array}$	$\begin{array}{r} 6 \\ + 8 \\ \hline \end{array}$	$\begin{array}{r} 10 \\ + 5 \\ \hline \end{array}$	$\begin{array}{r} 5 \\ + 8 \\ \hline \end{array}$	$\begin{array}{r} 11 \\ + 8 \\ \hline \end{array}$	$\begin{array}{r} 6 \\ + 4 \\ \hline \end{array}$	$\begin{array}{r} 11 \\ + 4 \\ \hline \end{array}$	$\begin{array}{r} 5 \\ + 9 \\ \hline \end{array}$
--	---	--	---	--	---	--	---



# IF I COULD GO ANYWHERE...

18  
WRITING

If I could go anywhere on summer vacation, I would  
go to \_\_\_\_\_

because \_\_\_\_\_

---

---

---

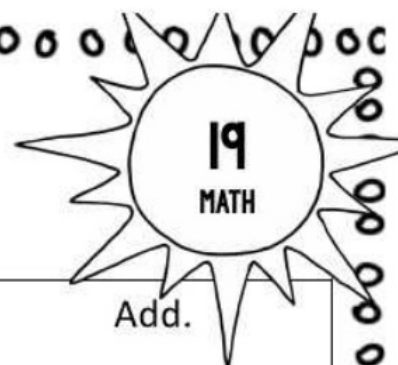
---

---

---

Draw a picture to match your writing.

## PROBLEM SOLVING



Add.

$$\begin{array}{r} 28 \\ + 5 \\ \hline \end{array}$$

Write a matching  
SUBTRACTION problem.

Add.

$$\begin{array}{r} 18 \\ + 10 \\ \hline \end{array}$$

Write a matching  
SUBTRACTION problem.

Add.

$$\begin{array}{r} 29 \\ + 4 \\ \hline \end{array}$$

Write a matching  
SUBTRACTION problem.

Subtract.

$$\begin{array}{r} 13 \\ - 6 \\ \hline \end{array}$$

Write a matching  
ADDITION problem.

Subtract.

$$\begin{array}{r} 22 \\ - 10 \\ \hline \end{array}$$

Write a matching  
ADDITION problem.

Subtract.

$$\begin{array}{r} 25 \\ - 6 \\ \hline \end{array}$$

Write a matching  
ADDITION problem.

## ROOT WORDS

20  
GRAMMAR

All of the words below have a "root word". Write the root word.  
For example, in uncomfortable - "comfort" is the root word.

rebuilding	
guessed	
remixing	
dishes	
walking	
jumped	
prereading	


Take a look at these "root words". How many new words can you "grow" from each root word.

For example, from love you can grow lovely, loving and loved.

watch	
play	
glass	
box	



## PLACE VALUE



**DRAW BASE TEN BLOCKS TO  
SHOW**

**17**

**DRAW BASE TEN BLOCKS TO  
SHOW**

**70**

## VERB SEARCH!

Choose a book and find 14 different verbs (action words). Write the verbs in the space below.

22

GRAMMAR

Book Title:

---


---

---

Author:


---

---



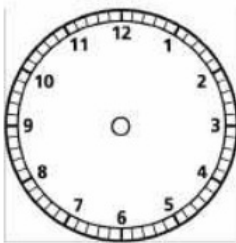
1. \_\_\_\_\_
2. \_\_\_\_\_
3. \_\_\_\_\_
4. \_\_\_\_\_
5. \_\_\_\_\_
6. \_\_\_\_\_
7. \_\_\_\_\_
8. \_\_\_\_\_
9. \_\_\_\_\_
10. \_\_\_\_\_
11. \_\_\_\_\_
12. \_\_\_\_\_
13. \_\_\_\_\_
14. \_\_\_\_\_

# TELLING TIME

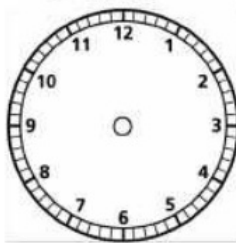


Show the time on the clocks.

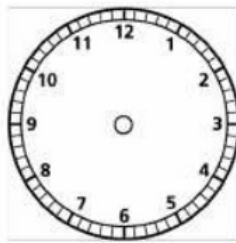
4:00



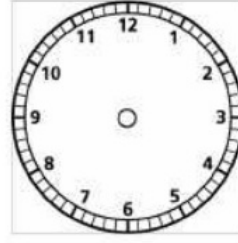
7:30



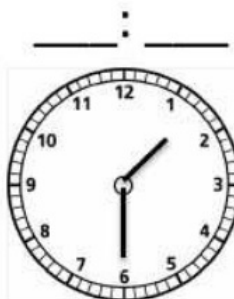
1:00



9:30



Write the time on the lines below .





## PROPER NOUNS

24

GRAMMAR

Read the words in each box.

Circle the word or phrase in each box that is a proper noun and needs a capital letter.

Hint: Names of people, months, and days of the week are all proper nouns

monday money monkey	soda sara songs	diner december days
fins face friday	maria markers math	ape adam airplane
camping carol car	thursday things table	school socks september

Write a sentence that includes two proper nouns:

---

---

---

## FAST MATH - SUBTRACTION

25  
MATH

Solve these SUBTRACTION problems as fast as you can.

$\begin{array}{r} 8 \\ -6 \\ \hline \end{array}$	$\begin{array}{r} 6 \\ -4 \\ \hline \end{array}$	$\begin{array}{r} 8 \\ -3 \\ \hline \end{array}$	$\begin{array}{r} 9 \\ -7 \\ \hline \end{array}$	$\begin{array}{r} 8 \\ -4 \\ \hline \end{array}$	$\begin{array}{r} 7 \\ -2 \\ \hline \end{array}$	$\begin{array}{r} 5 \\ -3 \\ \hline \end{array}$	$\begin{array}{r} 3 \\ -2 \\ \hline \end{array}$
--	--	--	--	--	--	--	--

$\begin{array}{r} 7 \\ -4 \\ \hline \end{array}$	$\begin{array}{r} 8 \\ -3 \\ \hline \end{array}$	$\begin{array}{r} 8 \\ -4 \\ \hline \end{array}$	$\begin{array}{r} 6 \\ -4 \\ \hline \end{array}$	$\begin{array}{r} 7 \\ -3 \\ \hline \end{array}$	$\begin{array}{r} 8 \\ -6 \\ \hline \end{array}$	$\begin{array}{r} 7 \\ -4 \\ \hline \end{array}$	$\begin{array}{r} 9 \\ -3 \\ \hline \end{array}$
--	--	--	--	--	--	--	--

$\begin{array}{r} 7 \\ -6 \\ \hline \end{array}$	$\begin{array}{r} 9 \\ -7 \\ \hline \end{array}$	$\begin{array}{r} 7 \\ -6 \\ \hline \end{array}$	$\begin{array}{r} 5 \\ -5 \\ \hline \end{array}$	$\begin{array}{r} 9 \\ -8 \\ \hline \end{array}$	$\begin{array}{r} 9 \\ -6 \\ \hline \end{array}$	$\begin{array}{r} 6 \\ -4 \\ \hline \end{array}$	$\begin{array}{r} 7 \\ -7 \\ \hline \end{array}$
--	--	--	--	--	--	--	--

$\begin{array}{r} 9 \\ -8 \\ \hline \end{array}$	$\begin{array}{r} 7 \\ -5 \\ \hline \end{array}$	$\begin{array}{r} 10 \\ -7 \\ \hline \end{array}$	$\begin{array}{r} 9 \\ -8 \\ \hline \end{array}$	$\begin{array}{r} 9 \\ -6 \\ \hline \end{array}$	$\begin{array}{r} 10 \\ -6 \\ \hline \end{array}$	$\begin{array}{r} 7 \\ -7 \\ \hline \end{array}$	$\begin{array}{r} 10 \\ -6 \\ \hline \end{array}$
--	--	---	--	--	---	--	---

$\begin{array}{r} 9 \\ -9 \\ \hline \end{array}$	$\begin{array}{r} 8 \\ -7 \\ \hline \end{array}$	$\begin{array}{r} 10 \\ -9 \\ \hline \end{array}$	$\begin{array}{r} 7 \\ -4 \\ \hline \end{array}$	$\begin{array}{r} 10 \\ -9 \\ \hline \end{array}$	$\begin{array}{r} 6 \\ -3 \\ \hline \end{array}$	$\begin{array}{r} 10 \\ -9 \\ \hline \end{array}$	$\begin{array}{r} 9 \\ -8 \\ \hline \end{array}$
--	--	---	--	---	--	---	--

## BOOK RESPONSE: Ask Questions

**26**  
READING

Read a fiction book at your reading. As you read, write down the questions you notice yourself asking.

Book Title: \_\_\_\_\_

**WHO?**

**WHAT?**


**WHY?**

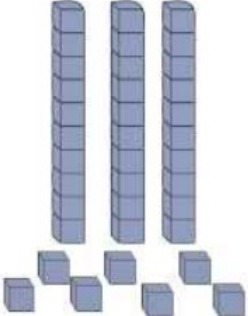
**HOW?**

**WHERE?**



# PLACE VALUE REVIEW



<p>I have this many blocks:</p> 	<p>How many tens:</p>	<p>How many ones:</p>	<p>How many blocks altogether:</p>
---	-----------------------	-----------------------	------------------------------------

<p>Draw this number in blocks:</p>	<p>How many tens:</p> <p>6</p>	<p>How many ones:</p> <p>4</p>	<p>How many blocks altogether:</p>
------------------------------------	--------------------------------	--------------------------------	------------------------------------

How many tens are in the number 53? \_\_\_\_\_

How many ones are in the number 75? \_\_\_\_\_

How many ones are in the number 80? \_\_\_\_\_

## BOOK RESPONSE: Structure (Fiction)

**28**  
READING

Read a fiction book at your reading level and respond to it below.

Book Title: \_\_\_\_\_

Describe the personality of the main character.

---

---

---

---

Describe the major events in the story.

---

---

---


---

---

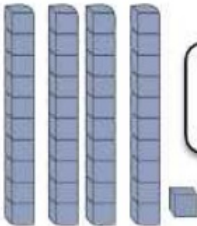

---

---

# PLACE VALUE REVIEW



Write  $>$   $<$  or  $=$  to compare the numbers below

63 <input type="text"/> 36	3 tens <input type="text"/> 33
 <input type="text"/> 41	20+4 <input type="text"/> 42
5 tens and 2 ones <input type="text"/> 25	89 <input type="text"/> 98
42 <input type="text"/> 2 tens	20+3 <input type="text"/> 




# BOOK RESPONSE: Parts of a Story

**30**  
READING

Read a fiction book at your reading level and respond to it below.

Book Title: \_\_\_\_\_

## THE CHARACTERS:

A rectangular box with a decorative scalloped border. It contains a smaller empty rectangular box at the bottom for a name or label.A rectangular box with a decorative scalloped border. It contains a smaller empty rectangular box at the bottom for a name or label.A rectangular box with a decorative scalloped border. It contains a smaller empty rectangular box at the bottom for a name or label.

Describe how this character acts or feels.

---

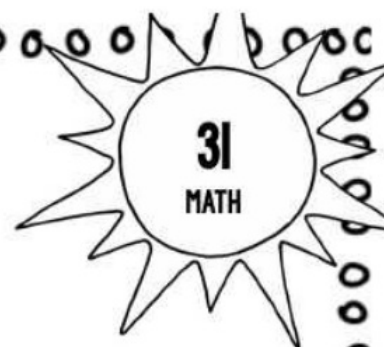
---

---

---



## PLACE VALUE REVIEW



Add:  $\begin{array}{r} 24 \\ + 9 \\ \hline \end{array}$	Show how to solve this using base ten block drawings:	Answer:
--	---	---------

Add:  $\begin{array}{r} 62 \\ + 20 \\ \hline \end{array}$	Show how to solve this using base ten block drawings:	Answer:
---	---	---------

Choose one of the problems above and write a subtraction sentence that matches:

\_\_\_\_\_ - \_\_\_\_\_ = \_\_\_\_\_

## 32

Describe some of the things you smell in the summer. Include at least four sentences.

This image shows a single sheet of white paper with horizontal ruling lines. The lines are evenly spaced and run across the width of the page. There are no margins, text, or other markings on the paper.

## FAST MATH - SUBTRACTION

**33**  
MATH

Solve these SUBTRACTION problems as fast as you can.

$\begin{array}{r} 2 \\ -2 \\ \hline \end{array}$	$\begin{array}{r} 4 \\ -1 \\ \hline \end{array}$	$\begin{array}{r} 10 \\ -1 \\ \hline \end{array}$	$\begin{array}{r} 10 \\ -7 \\ \hline \end{array}$	$\begin{array}{r} 2 \\ -1 \\ \hline \end{array}$	$\begin{array}{r} 4 \\ -2 \\ \hline \end{array}$	$\begin{array}{r} 9 \\ -2 \\ \hline \end{array}$	$\begin{array}{r} 8 \\ -2 \\ \hline \end{array}$
--	--	---	---	--	--	--	--

$\begin{array}{r} 6 \\ -4 \\ \hline \end{array}$	$\begin{array}{r} 4 \\ -3 \\ \hline \end{array}$	$\begin{array}{r} 9 \\ -3 \\ \hline \end{array}$	$\begin{array}{r} 8 \\ -4 \\ \hline \end{array}$	$\begin{array}{r} 9 \\ -3 \\ \hline \end{array}$	$\begin{array}{r} 8 \\ -4 \\ \hline \end{array}$	$\begin{array}{r} 7 \\ -4 \\ \hline \end{array}$	$\begin{array}{r} 7 \\ -3 \\ \hline \end{array}$
--	--	--	--	--	--	--	--

$\begin{array}{r} 9 \\ -5 \\ \hline \end{array}$	$\begin{array}{r} 9 \\ -6 \\ \hline \end{array}$	$\begin{array}{r} 10 \\ -6 \\ \hline \end{array}$	$\begin{array}{r} 8 \\ -5 \\ \hline \end{array}$	$\begin{array}{r} 6 \\ -5 \\ \hline \end{array}$	$\begin{array}{r} 9 \\ -5 \\ \hline \end{array}$	$\begin{array}{r} 7 \\ -4 \\ \hline \end{array}$	$\begin{array}{r} 7 \\ -6 \\ \hline \end{array}$
--	--	---	--	--	--	--	--

$\begin{array}{r} 10 \\ -8 \\ \hline \end{array}$	$\begin{array}{r} 8 \\ -7 \\ \hline \end{array}$	$\begin{array}{r} 9 \\ -7 \\ \hline \end{array}$	$\begin{array}{r} 9 \\ -2 \\ \hline \end{array}$	$\begin{array}{r} 10 \\ -8 \\ \hline \end{array}$	$\begin{array}{r} 10 \\ -7 \\ \hline \end{array}$	$\begin{array}{r} 8 \\ -7 \\ \hline \end{array}$	$\begin{array}{r} 9 \\ -8 \\ \hline \end{array}$
---	--	--	--	---	---	--	--

$\begin{array}{r} 10 \\ -9 \\ \hline \end{array}$	$\begin{array}{r} 9 \\ -9 \\ \hline \end{array}$	$\begin{array}{r} 7 \\ -3 \\ \hline \end{array}$	$\begin{array}{r} 10 \\ -10 \\ \hline \end{array}$	$\begin{array}{r} 6 \\ -2 \\ \hline \end{array}$	$\begin{array}{r} 9 \\ -3 \\ \hline \end{array}$	$\begin{array}{r} 10 \\ -9 \\ \hline \end{array}$	$\begin{array}{r} 8 \\ -2 \\ \hline \end{array}$
---	--	--	--	--	--	---	--

## SENTENCE OR FRAGMENT?

**34**  
GRAMMAR

Circle the COMPLETE sentences.

Cross out the incomplete sentence FRAGMENTS.

HINT: There are FIVE complete sentences and SEVEN fragments.

Soft sand in the ocean.	They are swimming.	Sarah loves strawberries.
The seashell is white.	Very cold water in the pool.	Do you like popsicles?
Tennis balls on the table?	She runs in the race.	The biggest sandcastle.
Can we ride bikes?	Laying in the hot sun.	Do you like to play soccer?



## PROBLEM SOLVING

**35**  
MATH

Add.

$$\begin{array}{r} 33 \\ + 5 \\ \hline \end{array}$$

Write a matching  
SUBTRACTION problem.

Add.

$$\begin{array}{r} 24 \\ + 10 \\ \hline \end{array}$$

Write a matching  
SUBTRACTION problem.

Add.

$$\begin{array}{r} 17 \\ + 4 \\ \hline \end{array}$$

Write a matching  
SUBTRACTION problem.

Subtract.

$$\begin{array}{r} 18 \\ - 6 \\ \hline \end{array}$$

Write a matching  
ADDITION problem.

Subtract.

$$\begin{array}{r} 34 \\ - 10 \\ \hline \end{array}$$

Write a matching  
ADDITION problem.

Subtract.

$$\begin{array}{r} 18 \\ - 8 \\ \hline \end{array}$$

Write a matching  
ADDITION problem.

## FAVORITE SEASON

What is your favorite season? Fall, winter, spring, or summer?  
Tell three reasons why this is your favorite season. Use complete sentences.

**36**  
WRITING

My favorite season is \_\_\_\_\_

Reason #1 \_\_\_\_\_

---

---

---

Reason #2 \_\_\_\_\_

---

---

---

Reason #3 \_\_\_\_\_

---

---

---

## PROBLEM SOLVING



Michael squeezed 12 lemons for his glass of lemonade.  
Alyssa squeezed 8 lemons for her glass of lemonade.  
How many more lemons did Michael squeeze than Alyssa?

Number Sentence	Answer

Jennie rode 6 laps around the park on her bike.  
Miguel rode 5 laps around the park on his bike. How many laps did they ride altogether?

Number Sentence	Answer

There were 12 girls and 7 boys at the swimming pool.  
How many kids were at the swimming pool altogether?

Number Sentence	Answer

## ADJECTIVE SEARCH!

Choose a book and find 14 different adjectives (describing words). Write the adjectives in the space below.

**38**  
GRAMMAR

Book Title:

---

---

---

Author:

---

---

1. \_\_\_\_\_

2. \_\_\_\_\_

3. \_\_\_\_\_

4. \_\_\_\_\_

5. \_\_\_\_\_

6. \_\_\_\_\_

7. \_\_\_\_\_

8. \_\_\_\_\_

9. \_\_\_\_\_


10. \_\_\_\_\_

11. \_\_\_\_\_

12. \_\_\_\_\_


13. \_\_\_\_\_

14. \_\_\_\_\_



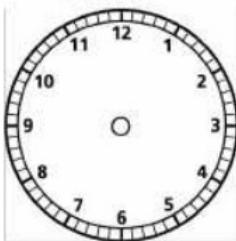


# TELLING TIME

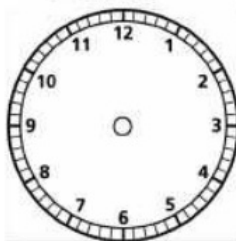


Show the time on the clocks.

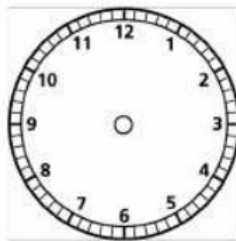
5:00



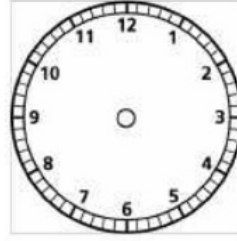
2:30




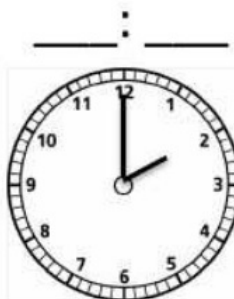
9:00



1:30



Write the time on the lines below .



## THE BEST ACTIVITY...

40  
WRITING

The best activity on a hot day is \_\_\_\_\_

---

because \_\_\_\_\_

---

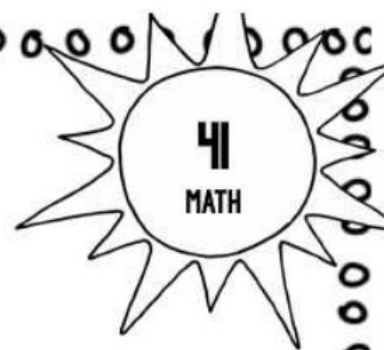
---

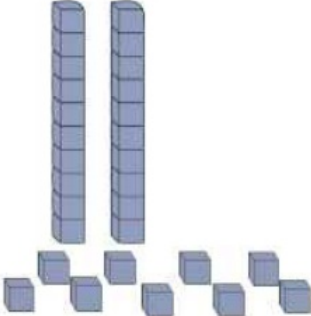
\_\_\_\_\_

---

**Figure 1**

# PLACE VALUE REVIEW



<p>I have this many blocks:</p> 	<p>How many tens:</p>	<p>How many ones:</p>	<p>How many blocks altogether:</p>
---	-----------------------	-----------------------	------------------------------------

<p>Draw this number in blocks:</p>	<p>How many tens:</p> <p>2</p>	<p>How many ones:</p> <p>3</p>	<p>How many blocks altogether:</p>
------------------------------------	--------------------------------	--------------------------------	------------------------------------

How many tens are in the number 71? \_\_\_\_\_

How many ones are in the number 42? \_\_\_\_\_

How many ones are in the number 65? \_\_\_\_\_

## ALIKE AND DIFFERENT

**42**  
GRAMMAR

Explain how the meaning of the two words are similar and different. Use complete sentences..

**dog      cat**

These two  
things are  
similar  
because...

**table      chair**

These two  
things are  
similar  
because...

**towel      blanket**

These two  
things are  
similar  
because...

**flower      tree**


These two  
things are  
similar  
because...



# PARTITIONING SHAPES

43  
MATH

Draw a line to cut the square into two equal shares.



Color in half of the entire square.

Draw lines to cut the square into four equal shares.




Color in one fourth of the entire square.

Draw a line to cut the circle into two equal shares.




Color in two shares of the circle.

Draw lines to cut the circle into four equal shares.



Color in one quarter of the circle.



How much of the square is colored in?

\_\_\_\_\_



Is this circle divided into equal shares?

\_\_\_\_\_

If it is, how many equal shares \_\_\_\_\_

## SETTING OF THE STORY

44  
READING

Read a fiction story and describe the setting of the story.

The **SETTING** means the time and place where the story happens. The words and the pictures help you see the setting.

The setting of the story was: \_\_\_\_\_

---

---

---

---

---

The words or pictures from the book that helped me identify the setting were: \_\_\_\_\_

---

---

---

---

## FAST MATH - ADDITION

45  
MATH

Solve these ADDITION problems as fast as you can.

$$\begin{array}{r} 1 \\ + 9 \\ \hline \end{array}$$

$$\begin{array}{r} 4 \\ + 1 \\ \hline \end{array}$$

$$\begin{array}{r} 2 \\ + 16 \\ \hline \end{array}$$

$$\begin{array}{r} 1 \\ + 7 \\ \hline \end{array}$$

$$\begin{array}{r} 2 \\ + 9 \\ \hline \end{array}$$

$$\begin{array}{r} 14 \\ + 2 \\ \hline \end{array}$$

$$\begin{array}{r} 1 \\ + 8 \\ \hline \end{array}$$

$$\begin{array}{r} 2 \\ + 15 \\ \hline \end{array}$$

$$\begin{array}{r} 3 \\ + 9 \\ \hline \end{array}$$

$$\begin{array}{r} 8 \\ + 4 \\ \hline \end{array}$$

$$\begin{array}{r} 3 \\ + 5 \\ \hline \end{array}$$

$$\begin{array}{r} 12 \\ + 4 \\ \hline \end{array}$$

$$\begin{array}{r} 13 \\ + 2 \\ \hline \end{array}$$

$$\begin{array}{r} 4 \\ + 9 \\ \hline \end{array}$$

$$\begin{array}{r} 11 \\ + 4 \\ \hline \end{array}$$

$$\begin{array}{r} 15 \\ + 3 \\ \hline \end{array}$$

$$\begin{array}{r} 4 \\ + 9 \\ \hline \end{array}$$

$$\begin{array}{r} 13 \\ + 4 \\ \hline \end{array}$$

$$\begin{array}{r} 8 \\ + 5 \\ \hline \end{array}$$

$$\begin{array}{r} 11 \\ + 6 \\ \hline \end{array}$$

$$\begin{array}{r} 12 \\ + 5 \\ \hline \end{array}$$

$$\begin{array}{r} 8 \\ + 4 \\ \hline \end{array}$$

$$\begin{array}{r} 10 \\ + 5 \\ \hline \end{array}$$

$$\begin{array}{r} 6 \\ + 5 \\ \hline \end{array}$$

$$\begin{array}{r} 8 \\ + 4 \\ \hline \end{array}$$

$$\begin{array}{r} 11 \\ + 8 \\ \hline \end{array}$$

$$\begin{array}{r} 7 \\ + 9 \\ \hline \end{array}$$

$$\begin{array}{r} 8 \\ + 10 \\ \hline \end{array}$$

$$\begin{array}{r} 9 \\ + 8 \\ \hline \end{array}$$

$$\begin{array}{r} 8 \\ + 8 \\ \hline \end{array}$$

$$\begin{array}{r} 9 \\ + 11 \\ \hline \end{array}$$

$$\begin{array}{r} 7 \\ + 8 \\ \hline \end{array}$$

$$\begin{array}{r} 8 \\ + 9 \\ \hline \end{array}$$

$$\begin{array}{r} 6 \\ + 9 \\ \hline \end{array}$$

$$\begin{array}{r} 10 \\ + 9 \\ \hline \end{array}$$

$$\begin{array}{r} 5 \\ + 9 \\ \hline \end{array}$$

$$\begin{array}{r} 10 \\ + 8 \\ \hline \end{array}$$

$$\begin{array}{r} 9 \\ + 4 \\ \hline \end{array}$$

$$\begin{array}{r} 12 \\ + 7 \\ \hline \end{array}$$

$$\begin{array}{r} 3 \\ + 9 \\ \hline \end{array}$$

## PAST TENSE

46  
WRITING

Complete the sentences.

Yesterday...

Right now...

Tomorrow...

Fill in the word or words to make the sentence make sense. If you get stuck, the CLUE WORDS may help you but they may need to be changed to work in the sentence.


### Clue Words

play walk cook think talk eat will

Yesterday I \_\_\_\_\_ home. When I got there, I  
\_\_\_\_\_ my DS for two hours! Then my mom  
\_\_\_\_\_ dinner and we all sat down and  
\_\_\_\_\_ about our day. Today I am very tired. Right  
now I want to \_\_\_\_\_ my DS again because I have a  
new game. My mind keeps \_\_\_\_\_ about the game.  
When I go home after school, I \_\_\_\_\_ my  
game if my mom lets me. Also, I \_\_\_\_\_ dinner.



## ADDING AND SUBTRACTING TEN



Continue the patterns below:

22		42			72	
	37	47				
86	76			46		
81		61	51			

Solve the problems mentally.

Try to find the answer in your mind without counting on your fingers or using pictures

$32 + 10 =$	$58 + 10 =$	$21 + 10 =$
$40 + 10 =$	$87 + 10 =$	$36 + 10 =$
$65 - 10 =$	$43 - 10 =$	$78 - 10 =$
$81 - 10 =$	$98 - 10 =$	$23 - 10 =$

# ALIKE AND DIFFERENT

48

VOCAB


The words in the word box below have been sorted into four different categories.

Word Box	
grass green soil water flower	
daisy seed weed stem leaf petal	
Types of Plants	Plants Need
flower daisy	water soil
weed grass	
Parts of a Plant	Other
stem leaf	green
petal seed	

Now it is your turn. Figure out a way to sort the following words into categories

Word Box	
airplane bus bike hot air balloon	
car walking scooter motorcycle train	
helicopter taxi truck	
Category Name: _____	Category Name: _____
Category Name: _____	Category Name: _____

## PROBLEM SOLVING



There are 4 blue kites, 3 red kites, and 5 yellow kites flying at the beach. How many kites are there altogether?

Number Sentence	Answer

Andre and his parents built a sandcastle. Andre made 5 towers. His dad made 6 towers. His mom made 7 towers. How many towers are on the sandcastle?

Number Sentence	Answer

The Thompson kids sold lemonade in their neighborhood. They sold 6 pitchers of plain lemonade, 2 pitchers of strawberry lemonade, and 5 pitchers of raspberry lemonade. How many pitchers of lemonade did they sell in all?

Number Sentence	Answer

# CHARACTER PERSONALITY

**50**  
READING

Read a fiction story and describe the main character of the story

Book Title: \_\_\_\_\_

Main Character's Name: \_\_\_\_\_

Main Character's Personality Traits (How can you describe their personality?): \_\_\_\_\_

\_\_\_\_\_

I know the character has these traits because the TEXT says:

---

---

---

---

---

---

---

---

I know the character has these traits because the PICTURES show:

---

---

---

---

---

---

---

---